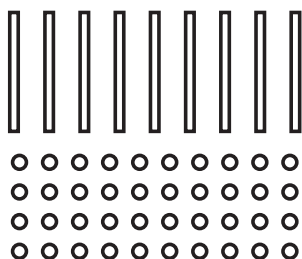


Name _____

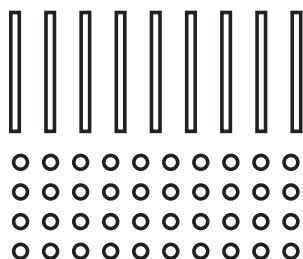
Square Line Dot

Show _____ three different ways.



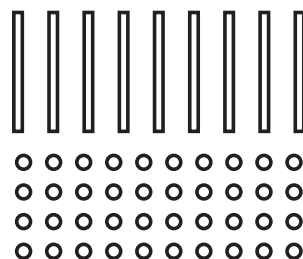
Tens _____

Ones _____



Tens _____

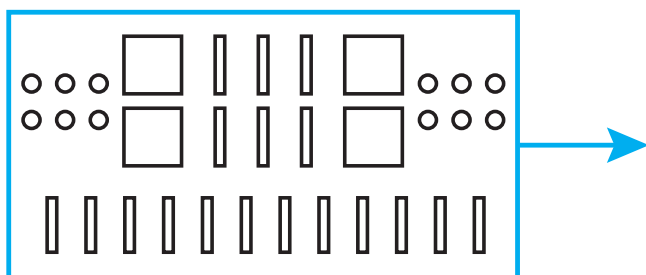
Ones _____



Tens _____

Ones _____

Show another way. How much? _____



Show another way. How much? _____

